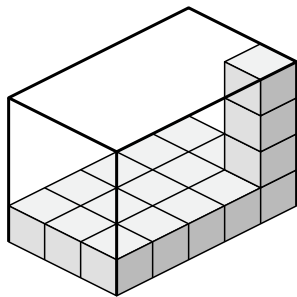


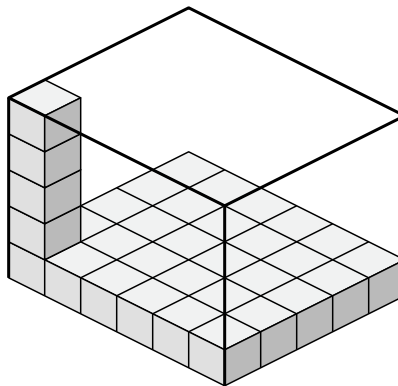


Create an expression to determine the volume of each box.

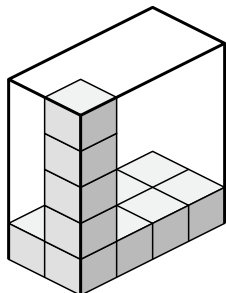
1)



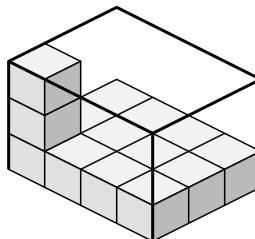
2)



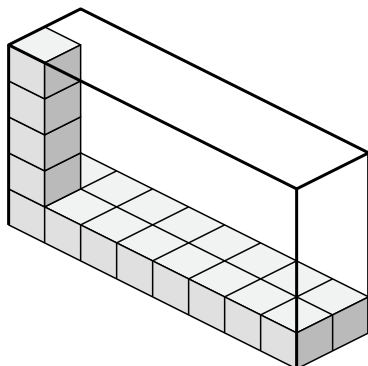
3)



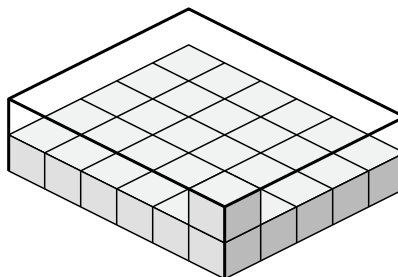
4)



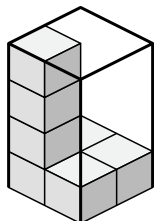
5)



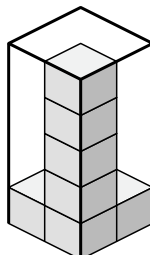
6)



7)



8)



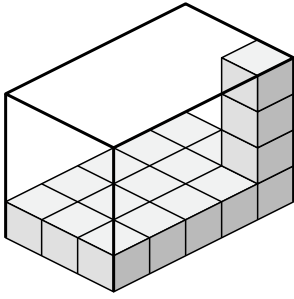
Answers

- 1. \_\_\_\_\_
- 2. \_\_\_\_\_
- 3. \_\_\_\_\_
- 4. \_\_\_\_\_
- 5. \_\_\_\_\_
- 6. \_\_\_\_\_
- 7. \_\_\_\_\_
- 8. \_\_\_\_\_

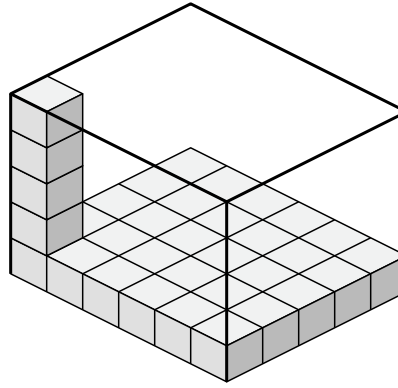


Create an expression to determine the volume of each box.

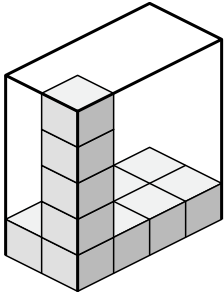
1)



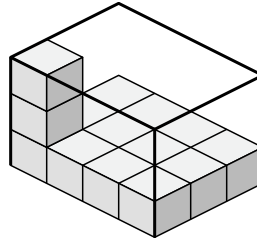
2)



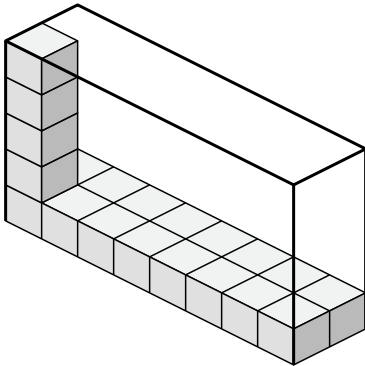
3)



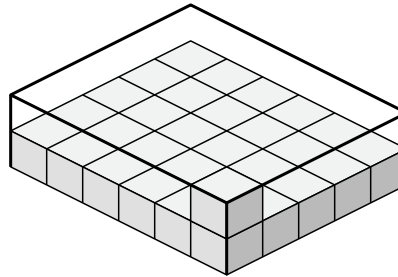
4)



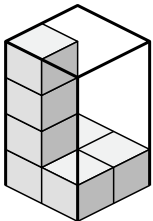
5)



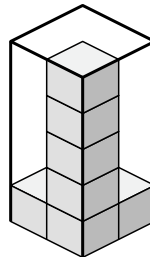
6)



7)



8)



Answers

1.  $3 \times 5 \times 4$

2.  $6 \times 5 \times 5$

3.  $2 \times 4 \times 5$

4.  $4 \times 3 \times 3$

5.  $8 \times 2 \times 5$

6.  $6 \times 5 \times 2$

7.  $2 \times 2 \times 4$

8.  $2 \times 2 \times 5$